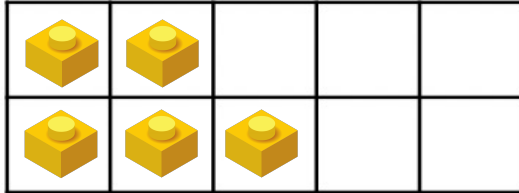


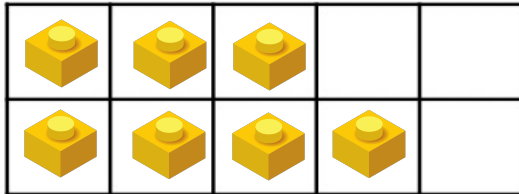
Deeper

Move 1 Lego block so that the correct amount is shown on the ten frame.
Which one will you move?

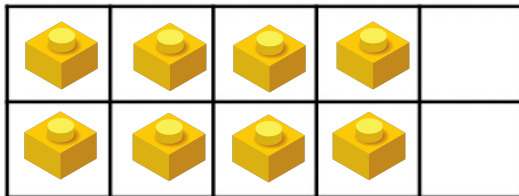
1 less than 6



1 more than 7



1 less than 8



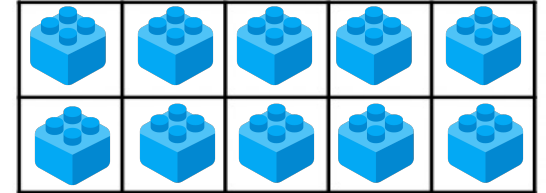
Use some ten frames and Lego pieces or counters to make your own puzzle like this for someone to solve.

Master the Curriculum

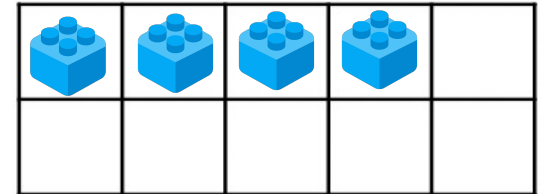
Deeper

Move 2 Lego blocks so that the correct amount is shown on the ten frame.
Which ones will you move?

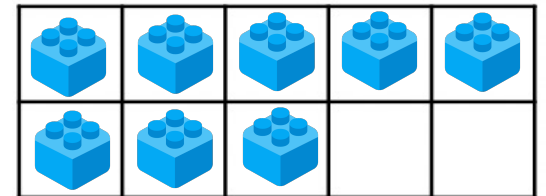
1 more than 8



1 less than 7



1 more than 6



Use some ten frames and Lego pieces or counters to make your own puzzle like this for someone to solve.

Master the Curriculum